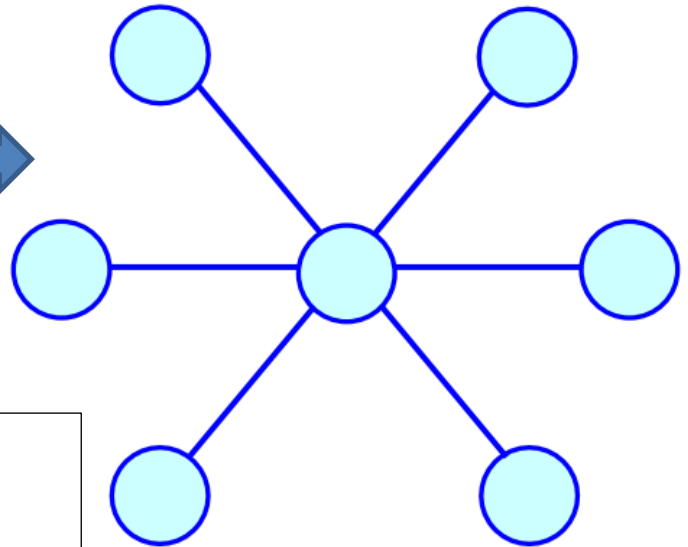


Put the numbers 1, 2, 3, 4, 5, 6 and 7 in the circles so that each straight line of three numbers adds up to the same total.



Outdoor fun! Scavenger Hunt

Why not hunt the garden for as many different objects possible. Draw a tally chart to see how many you find!

You never know, you might find some treasures!





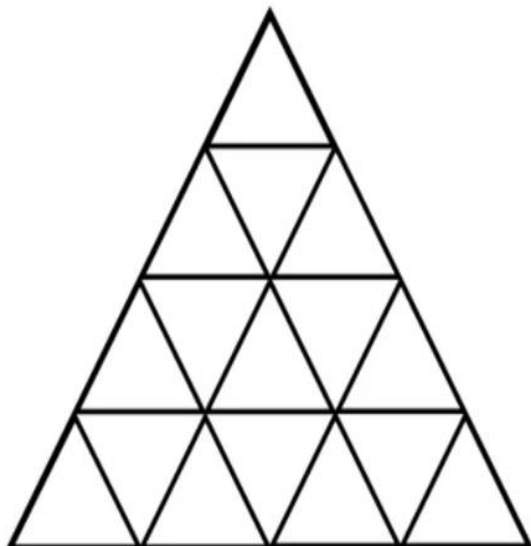
Have you ever wondered ...

If you add two even numbers together, will the answer always be even?

Why not give it a try?

How many triangles can you count in the image below?

Look carefully!



Cool maths APP's to try ...

Sumo maths
Cloud tables
Squeebles
Number monster
Math Bingo
Mr Thorne's Addition Space station
Monster Math