

# Maths Puzzle

March 2019



## Signs of Spring!


We can be mathematicians outside! Can you see signs of Spring? When you are out and about, be a Spring detective and count how many signs of spring you can see!

You could....

Count how many daffodils are flowering -  
Who can find the most?

Count the number of lambs in a field or  
even count the number of petals or new  
leaves a plant has grown.

Let's enjoy the Spring sunshine and use our  
maths brains in the fresh air!



More ideas for maths fun outside ...

Why not make your own outdoor clock? Year  
I have been learning to tell the time this week  
and are super at moving the minute and hour  
hand of an analogue clock to show different  
times. Why not give it a go!



More ideas for maths fun outside ...

Make 3d shapes from natural materials found on your travels.

## Monthly Maths Stars!

Y1 Oscar Coaten - for super  
effort in learning to tell the  
time.

Y2 Ethan Lucas - For  
always trying his best in  
maths.

Congratulations!

Farmer Brown had four  
fields on his farm. In  
each field he had 6  
sheep and 4 lambs.

How many lambs did  
Farmer Brown have on  
his farm?

How many sheep did  
Farmer Brown have on  
his farm?

How many animals in  
total did Farmer Brown  
have in his fields?



Sally wanted to plant some seeds to grow flowers for her garden. She had 6 flower pots. In each flower pot, Sally planted 3 seeds. If every seed grew into a healthy plant, how many plants will Sally have for her garden?




Molly planted a Sunflower and waited for it to grow.

On Monday she measured the height of the Sunflower. It was 15cm in length.


On Wednesday she measured the height of the sunflower again. It was 23 cm in length.

How many centimetres had the plant grown since it was measured on Monday?




It has been feeling very warm today!  
Can you research today's temperature and record it on this thermometer?  
You may need to ask an adult to help you to do this.

## Today's Temperature



°C



How many petals do I have?

If I grew 6 more petals, how many petals would I have in total?

I have 2 leaves. My 4 friends also have 2 leaves each. How many leaves do we have altogether?