

# Maths Puzzle

May 2019



Bertie was given pocket money from his Dad every Saturday.

Bertie had saved £6.00.

If Bertie was given £2.00 every week, how many weeks had Bertie saved his pocket money?

## Monthly Maths Stars!

Y1 - Ellie Abbott for always putting lots of effort into her maths learning!

Y2 - Max Browne for being a tough tortoise in Maths!

Congratulations!



Milly went swimming at quarter past three. If she swam for half an hour, what time did Milly finish swimming?



Which of these children are heaviest?

Which of these children are lightest?



Which of these ice creams are equal in size?



Which of these cups are full?

Which is empty?

Which is half full?




Mrs Jones planted 30 seeds. Only half of the seeds grew into plants. How many plants did Mrs Jones grow?






Max had 12 fish in a tank. 7 fish were gold, and 3 were silver. The rest of the fish were orange. How many of Max's fish were orange?



### Dino Addition!

 +  = 

 +  = 

 =   + 4 + 6 = 17

Missing number problems ....

Have a go!

$$5 + \square = 12$$

$$18 - \square = 6$$

