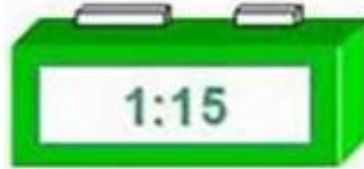



Monthly Maths Stars!

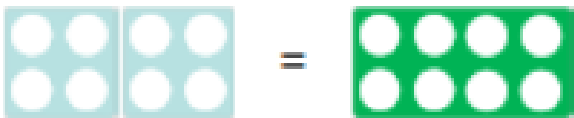
Y1 Poppy Hill - For always trying her very best in maths.

Y2- Thomas Garraway - For super effort and being a tough tortoise in maths.



Which of these clocks show quarter past one?

Can you solve these Numicon problems?




___ + ___ = ___



___ + ___ = ___

How many pencils?


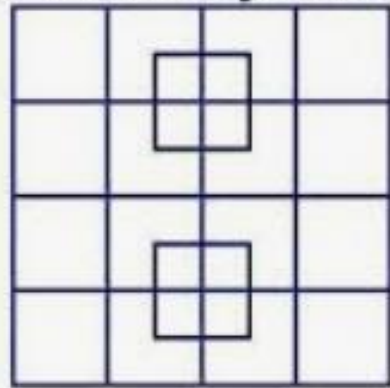
If I took away 3, how many pencils would there be left?



Why did the Maths textbook look so sad?

Because it had so many problems!

How many squares are in this picture?



3

4

7




How can we count these wellington boots quickly?

If another 2 pairs were added, how many would we have altogether?

Here is part of a number square.

5	6	7	8	9
15	16	17		
25				

Why didn't the two 4's feel like dinner?
Because they already 8.



Add together the two numbers that would be in the shaded squares.

Choose one of these symbols

$<$, $>$ or $=$

to make the number sentences correct.

$$24 + 5 \bigcirc 24 + 6$$

$$18 + 3 \bigcirc 17 + 4$$

$$33 + 15 \bigcirc 40 + 8$$



Each tray contains 6 muffins.



He sells 16 muffins and eats 5

How many muffins does he have left?